



Name: \_\_\_\_\_

# Go camping!


Look at the number on each sleeping bag. Write the numbers in order from least to greatest, and then color the bags.




\_\_\_\_\_ < \_\_\_\_\_ < \_\_\_\_\_ < \_\_\_\_\_ < \_\_\_\_\_  
red      blue      green      yellow      purple



\_\_\_\_\_ < \_\_\_\_\_ < \_\_\_\_\_ < \_\_\_\_\_ < \_\_\_\_\_  
yellow      pink      blue      brown      green



\_\_\_\_\_ < \_\_\_\_\_ < \_\_\_\_\_ < \_\_\_\_\_ < \_\_\_\_\_  
green      yellow      pink      purple      brown




\_\_\_\_\_ < \_\_\_\_\_ < \_\_\_\_\_ < \_\_\_\_\_ < \_\_\_\_\_  
pink      brown      green      red      blue

Name: \_\_\_\_\_

# NAME THAT NUMBER

Write three number sentences for each set of numbers.



12	6	4	5	3
		9		

6+3

=9

5+4

=9

12-3

=9



8	6	4	2	12
		10		

=10

=10

=10



3	6	9	15	6
		12		

=12

=12

=12



9	6	5	8	20
		14		

=14

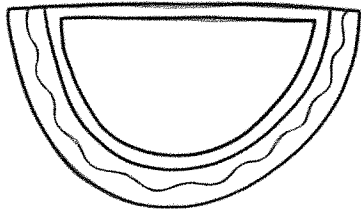
=14

=14

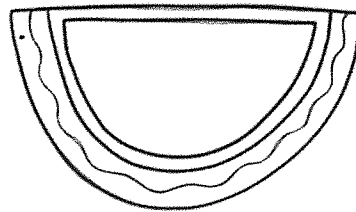
Name: \_\_\_\_\_

# NUMBERS

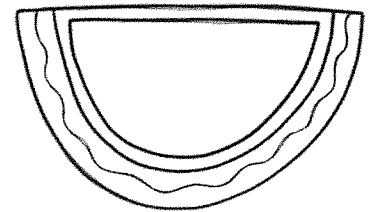
Write the correct number in the watermelon. Then, color the even numbered watermelons red and odd numbered watermelons green.



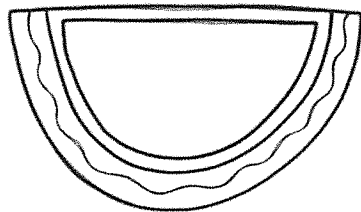
2 tens 3 ones



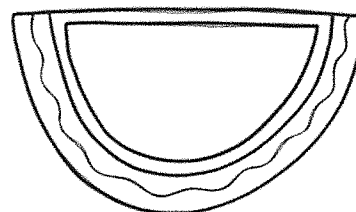
3 tens 5 ones



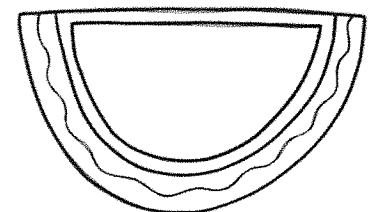
6 tens 2 ones



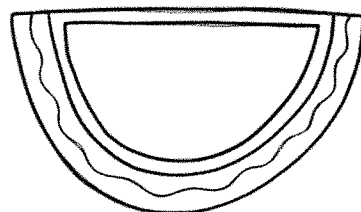
7 tens 4 ones



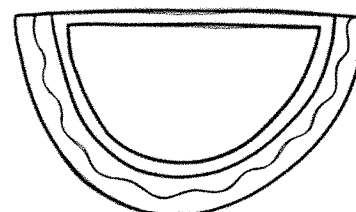
4 tens 7 ones



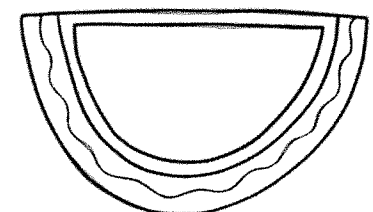
2 tens 9 ones



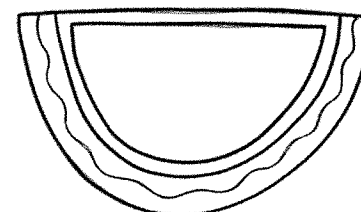
5 tens 3 ones



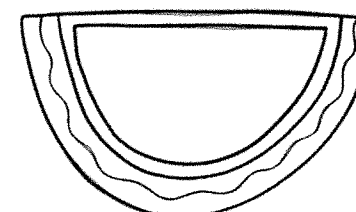
6 tens 8 ones



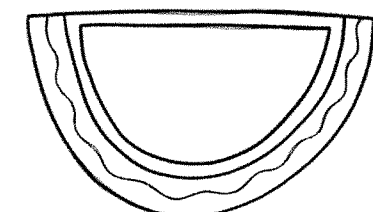
7 tens 6 ones



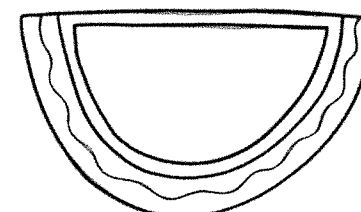
8 tens 3 ones




6 tens 2 ones



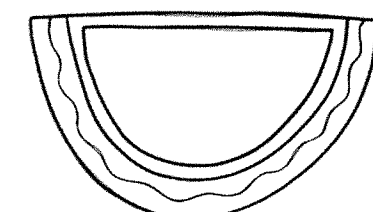
9 tens 0 ones



9 tens 9 ones



8 tens 5 ones



7 tens 9 ones

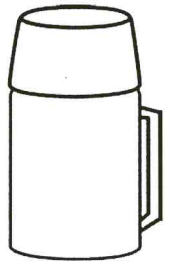

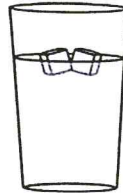
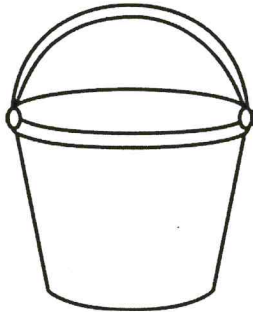



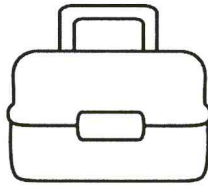
Name: \_\_\_\_\_

# Measurement

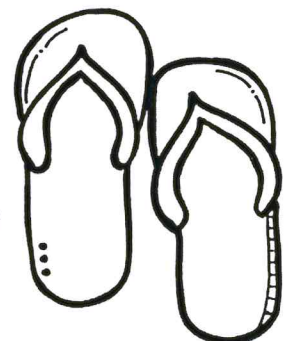



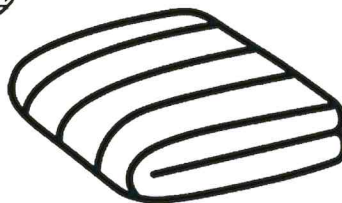
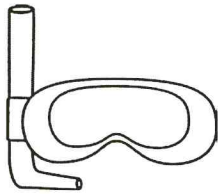
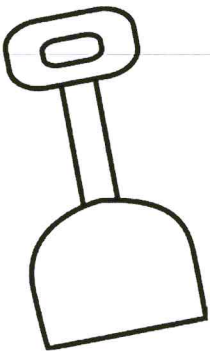


© Little Achievers, 2016.

Color the things that can hold more.



Color the things that are heavier.



Name: \_\_\_\_\_

# Counting COINS



PENNY



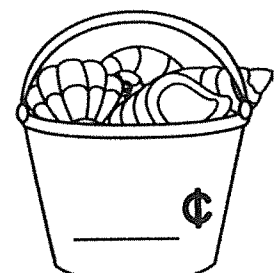









NICKEL



DIME




Count on the coins in each row to find the total amount.





Name: \_\_\_\_\_


# 2-Digit Subtraction


Subtract the numbers to find the difference. First subtract the numbers at ones place and then subtract the numbers at tens place.



$$\begin{array}{r} 75 \\ -24 \\ \hline \end{array}$$



$$\begin{array}{r} 88 \\ -32 \\ \hline \end{array}$$



$$\begin{array}{r} 67 \\ -34 \\ \hline \end{array}$$



$$\begin{array}{r} 58 \\ -22 \\ \hline \end{array}$$



$$\begin{array}{r} 79 \\ -22 \\ \hline \end{array}$$



$$\begin{array}{r} 67 \\ -40 \\ \hline \end{array}$$



$$\begin{array}{r} 98 \\ -52 \\ \hline \end{array}$$



$$\begin{array}{r} 86 \\ -13 \\ \hline \end{array}$$



$$\begin{array}{r} 99 \\ -53 \\ \hline \end{array}$$


$$\begin{array}{r} 80 \\ -20 \\ \hline \end{array}$$


$$\begin{array}{r} 63 \\ -42 \\ \hline \end{array}$$


$$\begin{array}{r} 78 \\ -50 \\ \hline \end{array}$$


$$\begin{array}{r} 86 \\ -43 \\ \hline \end{array}$$


$$\begin{array}{r} 97 \\ -54 \\ \hline \end{array}$$

