

$3+9$
=
 $12+4$
=
 $8-3$
=
 $6+7$
=

MATH

$7+8$
=
 $2+6$
=
 $9-4$
=
 $4+5$
=

Name _____

CCSS: 1.OA.6 Add and subtract within 20;

2.OA.2 Fluently add and subtract within 20

Addition Facts to 10 Assessment

Directions: Find the sum.

SCORE: _____ /25

$$\begin{array}{r} 1 \\ + 9 \\ \hline \end{array}$$

$$\begin{array}{r} 5 \\ + 2 \\ \hline \end{array}$$

$$\begin{array}{r} 2 \\ + 4 \\ \hline \end{array}$$

$$\begin{array}{r} 5 \\ + 3 \\ \hline \end{array}$$

$$\begin{array}{r} 2 \\ + 2 \\ \hline \end{array}$$

$$\begin{array}{r} 3 \\ + 2 \\ \hline \end{array}$$

$$\begin{array}{r} 2 \\ + 5 \\ \hline \end{array}$$

$$\begin{array}{r} 4 \\ + 1 \\ \hline \end{array}$$

$$\begin{array}{r} 0 \\ + 0 \\ \hline \end{array}$$

$$\begin{array}{r} 2 \\ + 2 \\ \hline \end{array}$$

$$\begin{array}{r} 0 \\ + 2 \\ \hline \end{array}$$

$$\begin{array}{r} 6 \\ + 3 \\ \hline \end{array}$$

$$\begin{array}{r} 1 \\ + 7 \\ \hline \end{array}$$

$$\begin{array}{r} 4 \\ + 3 \\ \hline \end{array}$$

$$\begin{array}{r} 5 \\ + 4 \\ \hline \end{array}$$

$$\begin{array}{r} 2 \\ + 5 \\ \hline \end{array}$$

$$\begin{array}{r} 5 \\ + 3 \\ \hline \end{array}$$

$$\begin{array}{r} 6 \\ + 2 \\ \hline \end{array}$$

$$\begin{array}{r} 2 \\ + 4 \\ \hline \end{array}$$

$$\begin{array}{r} 7 \\ + 0 \\ \hline \end{array}$$

$$\begin{array}{r} 1 \\ + 9 \\ \hline \end{array}$$

$$\begin{array}{r} 4 \\ + 3 \\ \hline \end{array}$$

$$\begin{array}{r} 5 \\ + 3 \\ \hline \end{array}$$

$$\begin{array}{r} 8 \\ + 2 \\ \hline \end{array}$$

$$\begin{array}{r} 6 \\ + 2 \\ \hline \end{array}$$

Name _____

CCSS: 1.OA.6 Add and subtract within 20;
2.OA.2 Fluently add and subtract within 20

Addition Facts to 10 Assessment

Directions: Find the sum.

SCORE: _____ /25

$$\begin{array}{r} 2 \\ + 2 \\ \hline \end{array}$$

$$\begin{array}{r} 6 \\ + 2 \\ \hline \end{array}$$

$$\begin{array}{r} 7 \\ + 3 \\ \hline \end{array}$$

$$\begin{array}{r} 1 \\ + 3 \\ \hline \end{array}$$

$$\begin{array}{r} 2 \\ + 6 \\ \hline \end{array}$$

$$\begin{array}{r} 3 \\ + 3 \\ \hline \end{array}$$

$$\begin{array}{r} 6 \\ + 4 \\ \hline \end{array}$$

$$\begin{array}{r} 7 \\ + 3 \\ \hline \end{array}$$

$$\begin{array}{r} 6 \\ + 0 \\ \hline \end{array}$$

$$\begin{array}{r} 3 \\ + 6 \\ \hline \end{array}$$

$$\begin{array}{r} 5 \\ + 2 \\ \hline \end{array}$$

$$\begin{array}{r} 4 \\ + 2 \\ \hline \end{array}$$

$$\begin{array}{r} 2 \\ + 7 \\ \hline \end{array}$$

$$\begin{array}{r} 6 \\ + 3 \\ \hline \end{array}$$

$$\begin{array}{r} 6 \\ + 4 \\ \hline \end{array}$$

$$\begin{array}{r} 5 \\ + 5 \\ \hline \end{array}$$

$$\begin{array}{r} 5 \\ + 2 \\ \hline \end{array}$$

$$\begin{array}{r} 6 \\ + 2 \\ \hline \end{array}$$

$$\begin{array}{r} 2 \\ + 4 \\ \hline \end{array}$$

$$\begin{array}{r} 4 \\ + 3 \\ \hline \end{array}$$

$$\begin{array}{r} 3 \\ + 6 \\ \hline \end{array}$$

$$\begin{array}{r} 2 \\ + 3 \\ \hline \end{array}$$

$$\begin{array}{r} 4 \\ + 3 \\ \hline \end{array}$$

$$\begin{array}{r} 7 \\ + 0 \\ \hline \end{array}$$

$$\begin{array}{r} 4 \\ + 4 \\ \hline \end{array}$$

Name _____

CCSS: 1.OA.6 Add and subtract within 20;

2.OA.2 Fluently add and subtract within 20

Addition Facts to 10 Assessment

Directions: Find the sum.

SCORE: _____ /25

$$\begin{array}{r} 3 \\ + 0 \\ \hline \end{array}$$

$$\begin{array}{r} 4 \\ + 4 \\ \hline \end{array}$$

$$\begin{array}{r} 7 \\ + 3 \\ \hline \end{array}$$

$$\begin{array}{r} 5 \\ + 4 \\ \hline \end{array}$$

$$\begin{array}{r} 5 \\ + 2 \\ \hline \end{array}$$

$$\begin{array}{r} 4 \\ + 3 \\ \hline \end{array}$$

$$\begin{array}{r} 3 \\ + 2 \\ \hline \end{array}$$

$$\begin{array}{r} 2 \\ + 8 \\ \hline \end{array}$$

$$\begin{array}{r} 6 \\ + 3 \\ \hline \end{array}$$

$$\begin{array}{r} 2 \\ + 4 \\ \hline \end{array}$$

$$\begin{array}{r} 5 \\ + 4 \\ \hline \end{array}$$

$$\begin{array}{r} 7 \\ + 2 \\ \hline \end{array}$$

$$\begin{array}{r} 6 \\ + 3 \\ \hline \end{array}$$

$$\begin{array}{r} 2 \\ + 5 \\ \hline \end{array}$$

$$\begin{array}{r} 4 \\ + 3 \\ \hline \end{array}$$

$$\begin{array}{r} 1 \\ + 7 \\ \hline \end{array}$$

$$\begin{array}{r} 5 \\ + 3 \\ \hline \end{array}$$

$$\begin{array}{r} 6 \\ + 2 \\ \hline \end{array}$$

$$\begin{array}{r} 4 \\ + 2 \\ \hline \end{array}$$

$$\begin{array}{r} 2 \\ + 5 \\ \hline \end{array}$$

$$\begin{array}{r} 2 \\ + 5 \\ \hline \end{array}$$

$$\begin{array}{r} 6 \\ + 4 \\ \hline \end{array}$$

$$\begin{array}{r} 4 \\ + 3 \\ \hline \end{array}$$

$$\begin{array}{r} 5 \\ + 1 \\ \hline \end{array}$$

$$\begin{array}{r} 6 \\ + 2 \\ \hline \end{array}$$

Name _____

CCSS: 1.OA.6 Add and subtract within 20;

2.OA.2 Fluently add and subtract within 20

Addition Facts to 10 Assessment

Directions: Find the sum.

SCORE: _____ /25

$$\begin{array}{r} 0 \\ + 8 \\ \hline \end{array}$$

$$\begin{array}{r} 2 \\ + 7 \\ \hline \end{array}$$

$$\begin{array}{r} 5 \\ + 3 \\ \hline \end{array}$$

$$\begin{array}{r} 1 \\ + 7 \\ \hline \end{array}$$

$$\begin{array}{r} 4 \\ + 6 \\ \hline \end{array}$$

$$\begin{array}{r} 3 \\ + 0 \\ \hline \end{array}$$

$$\begin{array}{r} 4 \\ + 4 \\ \hline \end{array}$$

$$\begin{array}{r} 7 \\ + 3 \\ \hline \end{array}$$

$$\begin{array}{r} 5 \\ + 4 \\ \hline \end{array}$$

$$\begin{array}{r} 5 \\ + 2 \\ \hline \end{array}$$

$$\begin{array}{r} 4 \\ + 3 \\ \hline \end{array}$$

$$\begin{array}{r} 3 \\ + 2 \\ \hline \end{array}$$

$$\begin{array}{r} 2 \\ + 8 \\ \hline \end{array}$$

$$\begin{array}{r} 6 \\ + 3 \\ \hline \end{array}$$

$$\begin{array}{r} 2 \\ + 4 \\ \hline \end{array}$$

$$\begin{array}{r} 5 \\ + 4 \\ \hline \end{array}$$

$$\begin{array}{r} 7 \\ + 2 \\ \hline \end{array}$$

$$\begin{array}{r} 6 \\ + 3 \\ \hline \end{array}$$

$$\begin{array}{r} 2 \\ + 5 \\ \hline \end{array}$$

$$\begin{array}{r} 4 \\ + 3 \\ \hline \end{array}$$

$$\begin{array}{r} 1 \\ + 7 \\ \hline \end{array}$$

$$\begin{array}{r} 5 \\ + 3 \\ \hline \end{array}$$

$$\begin{array}{r} 6 \\ + 2 \\ \hline \end{array}$$

$$\begin{array}{r} 4 \\ + 2 \\ \hline \end{array}$$

$$\begin{array}{r} 2 \\ + 5 \\ \hline \end{array}$$

Name _____

Addition Facts to 10 Assessment

Directions: Find the sum.

SCORE: _____ /25

$$\begin{array}{r} 6 \\ +4 \\ \hline \end{array}$$

$$\begin{array}{r} 7 \\ +3 \\ \hline \end{array}$$

$$\begin{array}{r} 6 \\ +0 \\ \hline \end{array}$$

$$\begin{array}{r} 3 \\ +6 \\ \hline \end{array}$$

$$\begin{array}{r} 8 \\ +2 \\ \hline \end{array}$$

$$\begin{array}{r} 4 \\ +2 \\ \hline \end{array}$$

$$\begin{array}{r} 2 \\ +7 \\ \hline \end{array}$$

$$\begin{array}{r} 6 \\ +3 \\ \hline \end{array}$$

$$\begin{array}{r} 6 \\ +4 \\ \hline \end{array}$$

$$\begin{array}{r} 5 \\ +3 \\ \hline \end{array}$$

$$\begin{array}{r} 5 \\ +2 \\ \hline \end{array}$$

$$\begin{array}{r} 6 \\ +2 \\ \hline \end{array}$$

$$\begin{array}{r} 2 \\ +4 \\ \hline \end{array}$$

$$\begin{array}{r} 4 \\ +3 \\ \hline \end{array}$$

$$\begin{array}{r} 5 \\ +1 \\ \hline \end{array}$$

$$\begin{array}{r} 2 \\ +3 \\ \hline \end{array}$$

$$\begin{array}{r} 4 \\ +3 \\ \hline \end{array}$$

$$\begin{array}{r} 7 \\ +0 \\ \hline \end{array}$$

$$\begin{array}{r} 4 \\ +4 \\ \hline \end{array}$$

$$\begin{array}{r} 7 \\ +1 \\ \hline \end{array}$$

$$\begin{array}{r} 1 \\ +5 \\ \hline \end{array}$$

$$\begin{array}{r} 3 \\ +3 \\ \hline \end{array}$$

$$\begin{array}{r} 5 \\ +4 \\ \hline \end{array}$$

$$\begin{array}{r} 3 \\ +2 \\ \hline \end{array}$$

$$\begin{array}{r} 6 \\ +2 \\ \hline \end{array}$$

Name _____

Addition Facts to 10 Assessment

Directions: Find the sum.

SCORE: _____ /25

$$\begin{array}{r} 2 \\ + 0 \\ \hline \end{array}$$

$$\begin{array}{r} 7 \\ + 2 \\ \hline \end{array}$$

$$\begin{array}{r} 3 \\ + 6 \\ \hline \end{array}$$

$$\begin{array}{r} 2 \\ + 5 \\ \hline \end{array}$$

$$\begin{array}{r} 2 \\ + 7 \\ \hline \end{array}$$

$$\begin{array}{r} 4 \\ + 4 \\ \hline \end{array}$$

$$\begin{array}{r} 6 \\ + 3 \\ \hline \end{array}$$

$$\begin{array}{r} 5 \\ + 3 \\ \hline \end{array}$$

$$\begin{array}{r} 7 \\ + 2 \\ \hline \end{array}$$

$$\begin{array}{r} 8 \\ + 1 \\ \hline \end{array}$$

$$\begin{array}{r} 1 \\ + 5 \\ \hline \end{array}$$

$$\begin{array}{r} 2 \\ + 0 \\ \hline \end{array}$$

$$\begin{array}{r} 9 \\ + 1 \\ \hline \end{array}$$

$$\begin{array}{r} 2 \\ + 8 \\ \hline \end{array}$$

$$\begin{array}{r} 4 \\ + 5 \\ \hline \end{array}$$

$$\begin{array}{r} 5 \\ + 2 \\ \hline \end{array}$$

$$\begin{array}{r} 6 \\ + 2 \\ \hline \end{array}$$

$$\begin{array}{r} 4 \\ + 6 \\ \hline \end{array}$$

$$\begin{array}{r} 1 \\ + 8 \\ \hline \end{array}$$

$$\begin{array}{r} 5 \\ + 1 \\ \hline \end{array}$$

$$\begin{array}{r} 2 \\ + 6 \\ \hline \end{array}$$

$$\begin{array}{r} 1 \\ + 4 \\ \hline \end{array}$$

$$\begin{array}{r} 5 \\ + 5 \\ \hline \end{array}$$

$$\begin{array}{r} 2 \\ + 5 \\ \hline \end{array}$$

$$\begin{array}{r} 4 \\ + 3 \\ \hline \end{array}$$

Name : _____

Score : _____

Teacher : _____

Date : _____

1 Minute Drill

$$\begin{array}{r} 6 \\ - 3 \\ \hline \end{array}$$

$$\begin{array}{r} 9 \\ - 2 \\ \hline \end{array}$$

$$\begin{array}{r} 7 \\ - 3 \\ \hline \end{array}$$

$$\begin{array}{r} 5 \\ - 3 \\ \hline \end{array}$$

$$\begin{array}{r} 12 \\ - 2 \\ \hline \end{array}$$

$$\begin{array}{r} 4 \\ - 0 \\ \hline \end{array}$$

$$\begin{array}{r} 5 \\ - 4 \\ \hline \end{array}$$

$$\begin{array}{r} 12 \\ - 4 \\ \hline \end{array}$$

$$\begin{array}{r} 10 \\ - 0 \\ \hline \end{array}$$

$$\begin{array}{r} 10 \\ - 3 \\ \hline \end{array}$$

$$\begin{array}{r} 7 \\ - 6 \\ \hline \end{array}$$

$$\begin{array}{r} 8 \\ - 1 \\ \hline \end{array}$$

$$\begin{array}{r} 9 \\ - 1 \\ \hline \end{array}$$

$$\begin{array}{r} 10 \\ - 6 \\ \hline \end{array}$$

$$\begin{array}{r} 8 \\ - 8 \\ \hline \end{array}$$

$$\begin{array}{r} 6 \\ - 2 \\ \hline \end{array}$$

$$\begin{array}{r} 10 \\ - 9 \\ \hline \end{array}$$

$$\begin{array}{r} 7 \\ - 1 \\ \hline \end{array}$$

$$\begin{array}{r} 7 \\ - 1 \\ \hline \end{array}$$

$$\begin{array}{r} 8 \\ - 5 \\ \hline \end{array}$$

Name : _____

Score : _____

Teacher : _____

Date : _____

1 Minute Drill

$$\begin{array}{r} 12 \\ - 3 \\ \hline \end{array}$$

$$\begin{array}{r} 6 \\ - 1 \\ \hline \end{array}$$

$$\begin{array}{r} 9 \\ - 6 \\ \hline \end{array}$$

$$\begin{array}{r} 4 \\ - 4 \\ \hline \end{array}$$

$$\begin{array}{r} 10 \\ - 6 \\ \hline \end{array}$$

$$\begin{array}{r} 5 \\ - 2 \\ \hline \end{array}$$

$$\begin{array}{r} 9 \\ - 7 \\ \hline \end{array}$$

$$\begin{array}{r} 6 \\ - 3 \\ \hline \end{array}$$

$$\begin{array}{r} 7 \\ - 3 \\ \hline \end{array}$$

$$\begin{array}{r} 10 \\ - 0 \\ \hline \end{array}$$

$$\begin{array}{r} 7 \\ - 2 \\ \hline \end{array}$$

$$\begin{array}{r} 8 \\ - 5 \\ \hline \end{array}$$

$$\begin{array}{r} 12 \\ - 10 \\ \hline \end{array}$$

$$\begin{array}{r} 8 \\ - 5 \\ \hline \end{array}$$

$$\begin{array}{r} 9 \\ - 8 \\ \hline \end{array}$$

$$\begin{array}{r} 7 \\ - 1 \\ \hline \end{array}$$

$$\begin{array}{r} 9 \\ - 2 \\ \hline \end{array}$$

$$\begin{array}{r} 5 \\ - 4 \\ \hline \end{array}$$

$$\begin{array}{r} 10 \\ - 0 \\ \hline \end{array}$$

$$\begin{array}{r} 4 \\ - 3 \\ \hline \end{array}$$

Name : _____

Score : _____

Teacher : _____

Date : _____

1 Minute Drill

$$\begin{array}{r} 5 \\ - 0 \\ \hline \end{array}$$

$$\begin{array}{r} 8 \\ - 6 \\ \hline \end{array}$$

$$\begin{array}{r} 10 \\ - 1 \\ \hline \end{array}$$

$$\begin{array}{r} 10 \\ - 2 \\ \hline \end{array}$$

$$\begin{array}{r} 6 \\ - 5 \\ \hline \end{array}$$

$$\begin{array}{r} 5 \\ - 4 \\ \hline \end{array}$$

$$\begin{array}{r} 7 \\ - 2 \\ \hline \end{array}$$

$$\begin{array}{r} 3 \\ - 2 \\ \hline \end{array}$$

$$\begin{array}{r} 12 \\ - 4 \\ \hline \end{array}$$

$$\begin{array}{r} 8 \\ - 8 \\ \hline \end{array}$$

$$\begin{array}{r} 6 \\ - 4 \\ \hline \end{array}$$

$$\begin{array}{r} 10 \\ - 3 \\ \hline \end{array}$$

$$\begin{array}{r} 7 \\ - 1 \\ \hline \end{array}$$

$$\begin{array}{r} 9 \\ - 0 \\ \hline \end{array}$$

$$\begin{array}{r} 9 \\ - 7 \\ \hline \end{array}$$

$$\begin{array}{r} 8 \\ - 5 \\ \hline \end{array}$$

$$\begin{array}{r} 2 \\ - 0 \\ \hline \end{array}$$

$$\begin{array}{r} 1 \\ - 1 \\ \hline \end{array}$$

$$\begin{array}{r} 3 \\ - 0 \\ \hline \end{array}$$

$$\begin{array}{r} 10 \\ - 6 \\ \hline \end{array}$$

Name : _____

Score : _____

Teacher : _____

Date : _____

1 Minute Drill

$$\begin{array}{r} 9 \\ - 1 \\ \hline \end{array}$$

$$\begin{array}{r} 10 \\ - 8 \\ \hline \end{array}$$

$$\begin{array}{r} 8 \\ - 7 \\ \hline \end{array}$$

$$\begin{array}{r} 9 \\ - 8 \\ \hline \end{array}$$

$$\begin{array}{r} 8 \\ - 4 \\ \hline \end{array}$$

$$\begin{array}{r} 12 \\ - 5 \\ \hline \end{array}$$

$$\begin{array}{r} 6 \\ - 5 \\ \hline \end{array}$$

$$\begin{array}{r} 4 \\ - 2 \\ \hline \end{array}$$

$$\begin{array}{r} 3 \\ - 3 \\ \hline \end{array}$$

$$\begin{array}{r} 10 \\ - 1 \\ \hline \end{array}$$

$$\begin{array}{r} 10 \\ - 0 \\ \hline \end{array}$$

$$\begin{array}{r} 12 \\ - 10 \\ \hline \end{array}$$

$$\begin{array}{r} 1 \\ - 0 \\ \hline \end{array}$$

$$\begin{array}{r} 4 \\ - 2 \\ \hline \end{array}$$

$$\begin{array}{r} 9 \\ - 0 \\ \hline \end{array}$$

$$\begin{array}{r} 7 \\ - 2 \\ \hline \end{array}$$

$$\begin{array}{r} 7 \\ - 6 \\ \hline \end{array}$$

$$\begin{array}{r} 6 \\ - 3 \\ \hline \end{array}$$

$$\begin{array}{r} 5 \\ - 2 \\ \hline \end{array}$$

$$\begin{array}{r} 7 \\ - 0 \\ \hline \end{array}$$

Name : _____

Score : _____

Teacher : _____

Date : _____

1 Minute Drill

$$\begin{array}{r} 6 \\ - 4 \\ \hline \end{array}$$

$$\begin{array}{r} 3 \\ - 0 \\ \hline \end{array}$$

$$\begin{array}{r} 9 \\ - 9 \\ \hline \end{array}$$

$$\begin{array}{r} 10 \\ - 9 \\ \hline \end{array}$$

$$\begin{array}{r} 1 \\ - 0 \\ \hline \end{array}$$

$$\begin{array}{r} 10 \\ - 5 \\ \hline \end{array}$$

$$\begin{array}{r} 1 \\ - 1 \\ \hline \end{array}$$

$$\begin{array}{r} 8 \\ - 0 \\ \hline \end{array}$$

$$\begin{array}{r} 6 \\ - 4 \\ \hline \end{array}$$

$$\begin{array}{r} 7 \\ - 7 \\ \hline \end{array}$$

$$\begin{array}{r} 4 \\ - 0 \\ \hline \end{array}$$

$$\begin{array}{r} 5 \\ - 4 \\ \hline \end{array}$$

$$\begin{array}{r} 10 \\ - 2 \\ \hline \end{array}$$

$$\begin{array}{r} 3 \\ - 2 \\ \hline \end{array}$$

$$\begin{array}{r} 12 \\ - 2 \\ \hline \end{array}$$

$$\begin{array}{r} 3 \\ - 1 \\ \hline \end{array}$$

$$\begin{array}{r} 8 \\ - 2 \\ \hline \end{array}$$

$$\begin{array}{r} 7 \\ - 5 \\ \hline \end{array}$$

$$\begin{array}{r} 12 \\ - 8 \\ \hline \end{array}$$

$$\begin{array}{r} 7 \\ - 6 \\ \hline \end{array}$$

Name : _____

Score : _____

Teacher : _____

Date : _____

1 Minute Drill

$$\begin{array}{r} 5 \\ - 0 \\ \hline \end{array}$$

$$\begin{array}{r} 6 \\ - 0 \\ \hline \end{array}$$

$$\begin{array}{r} 8 \\ - 6 \\ \hline \end{array}$$

$$\begin{array}{r} 10 \\ - 9 \\ \hline \end{array}$$

$$\begin{array}{r} 7 \\ - 2 \\ \hline \end{array}$$

$$\begin{array}{r} 8 \\ - 5 \\ \hline \end{array}$$

$$\begin{array}{r} 7 \\ - 2 \\ \hline \end{array}$$

$$\begin{array}{r} 7 \\ - 1 \\ \hline \end{array}$$

$$\begin{array}{r} 10 \\ - 9 \\ \hline \end{array}$$

$$\begin{array}{r} 8 \\ - 0 \\ \hline \end{array}$$

$$\begin{array}{r} 4 \\ - 1 \\ \hline \end{array}$$

$$\begin{array}{r} 9 \\ - 2 \\ \hline \end{array}$$

$$\begin{array}{r} 12 \\ - 10 \\ \hline \end{array}$$

$$\begin{array}{r} 4 \\ - 3 \\ \hline \end{array}$$

$$\begin{array}{r} 8 \\ - 4 \\ \hline \end{array}$$

$$\begin{array}{r} 9 \\ - 7 \\ \hline \end{array}$$

$$\begin{array}{r} 12 \\ - 6 \\ \hline \end{array}$$

$$\begin{array}{r} 5 \\ - 3 \\ \hline \end{array}$$


$$\begin{array}{r} 5 \\ - 1 \\ \hline \end{array}$$

$$\begin{array}{r} 2 \\ - 0 \\ \hline \end{array}$$

Name: _____

CCSS 2.NBT.5 Fluently add and subtract within 100.....

2-Digit Addition With Regrouping: Ones

 Directions: Find the sums.

$$\begin{array}{r} 32 \\ +59 \\ \hline \end{array}$$

$$\begin{array}{r} 13 \\ +57 \\ \hline \end{array}$$

$$\begin{array}{r} 42 \\ +28 \\ \hline \end{array}$$

$$\begin{array}{r} 77 \\ +16 \\ \hline \end{array}$$

$$\begin{array}{r} 59 \\ +33 \\ \hline \end{array}$$

$$\begin{array}{r} 16 \\ +54 \\ \hline \end{array}$$

$$\begin{array}{r} 23 \\ +37 \\ \hline \end{array}$$

$$\begin{array}{r} 33 \\ +48 \\ \hline \end{array}$$

$$\begin{array}{r} 23 \\ +28 \\ \hline \end{array}$$

$$\begin{array}{r} 66 \\ +19 \\ \hline \end{array}$$

$$\begin{array}{r} 37 \\ +49 \\ \hline \end{array}$$

$$\begin{array}{r} 61 \\ +22 \\ \hline \end{array}$$

$$\begin{array}{r} 71 \\ +19 \\ \hline \end{array}$$

$$\begin{array}{r} 58 \\ +15 \\ \hline \end{array}$$

$$\begin{array}{r} 13 \\ +39 \\ \hline \end{array}$$

$$\begin{array}{r} 46 \\ +25 \\ \hline \end{array}$$

$$\begin{array}{r} 56 \\ +16 \\ \hline \end{array}$$

$$\begin{array}{r} 58 \\ +19 \\ \hline \end{array}$$

$$\begin{array}{r} 72 \\ +19 \\ \hline \end{array}$$

$$\begin{array}{r} 17 \\ +45 \\ \hline \end{array}$$

I double checked my work.

 Name: _____

CCSS 2.NBT.5 Fluently add and subtract within 100.....

2-Digit Addition With Regrouping: Ones

~~6~~ Directions: Find the sums.

$$\begin{array}{r} 19 \\ +34 \\ \hline \end{array}$$

$$\begin{array}{r} 13 \\ +18 \\ \hline \end{array}$$

$$\begin{array}{r} 77 \\ +16 \\ \hline \end{array}$$

$$\begin{array}{r} 54 \\ +36 \\ \hline \end{array}$$

$$\begin{array}{r} 77 \\ +19 \\ \hline \end{array}$$

$$\begin{array}{r} 37 \\ +44 \\ \hline \end{array}$$

$$\begin{array}{r} 66 \\ +29 \\ \hline \end{array}$$

$$\begin{array}{r} 32 \\ +28 \\ \hline \end{array}$$

$$\begin{array}{r} 71 \\ +19 \\ \hline \end{array}$$

$$\begin{array}{r} 38 \\ +17 \\ \hline \end{array}$$

$$\begin{array}{r} 38 \\ +49 \\ \hline \end{array}$$

$$\begin{array}{r} 72 \\ +19 \\ \hline \end{array}$$

$$\begin{array}{r} 76 \\ +15 \\ \hline \end{array}$$

$$\begin{array}{r} 55 \\ +26 \\ \hline \end{array}$$

$$\begin{array}{r} 36 \\ +47 \\ \hline \end{array}$$

$$\begin{array}{r} 41 \\ +49 \\ \hline \end{array}$$

$$\begin{array}{r} 36 \\ +14 \\ \hline \end{array}$$

$$\begin{array}{r} 78 \\ +15 \\ \hline \end{array}$$

$$\begin{array}{r} 17 \\ +78 \\ \hline \end{array}$$

$$\begin{array}{r} 74 \\ +19 \\ \hline \end{array}$$

$$\begin{array}{r} 36 \\ +29 \\ \hline \end{array}$$

$$\begin{array}{r} 14 \\ +38 \\ \hline \end{array}$$

$$\begin{array}{r} 39 \\ +13 \\ \hline \end{array}$$

$$\begin{array}{r} 48 \\ +45 \\ \hline \end{array}$$

$$\begin{array}{r} 16 \\ +38 \\ \hline \end{array}$$

I double checked my work.

Name: _____

2-Digit Subtraction Without Regrouping

$$\begin{array}{r} 69 \\ -46 \\ \hline \end{array}$$

$$\begin{array}{r} 62 \\ -42 \\ \hline \end{array}$$

$$\begin{array}{r} 94 \\ -80 \\ \hline \end{array}$$

$$\begin{array}{r} 33 \\ -22 \\ \hline \end{array}$$

$$\begin{array}{r} 30 \\ -10 \\ \hline \end{array}$$

$$\begin{array}{r} 76 \\ -52 \\ \hline \end{array}$$

$$\begin{array}{r} 21 \\ -10 \\ \hline \end{array}$$

$$\begin{array}{r} 24 \\ -13 \\ \hline \end{array}$$

$$\begin{array}{r} 54 \\ -23 \\ \hline \end{array}$$

$$\begin{array}{r} 38 \\ -24 \\ \hline \end{array}$$

$$\begin{array}{r} 54 \\ -20 \\ \hline \end{array}$$

$$\begin{array}{r} 49 \\ -26 \\ \hline \end{array}$$

$$\begin{array}{r} 35 \\ -21 \\ \hline \end{array}$$

$$\begin{array}{r} 82 \\ -22 \\ \hline \end{array}$$

$$\begin{array}{r} 26 \\ -13 \\ \hline \end{array}$$

$$\begin{array}{r} 45 \\ -11 \\ \hline \end{array}$$

$$\begin{array}{r} 99 \\ -36 \\ \hline \end{array}$$

$$\begin{array}{r} 27 \\ -14 \\ \hline \end{array}$$

$$\begin{array}{r} 84 \\ -40 \\ \hline \end{array}$$

$$\begin{array}{r} 77 \\ -52 \\ \hline \end{array}$$

$$\begin{array}{r} 38 \\ -27 \\ \hline \end{array}$$

$$\begin{array}{r} 65 \\ -50 \\ \hline \end{array}$$

$$\begin{array}{r} 86 \\ -74 \\ \hline \end{array}$$

$$\begin{array}{r} 96 \\ -65 \\ \hline \end{array}$$

$$\begin{array}{r} 78 \\ -35 \\ \hline \end{array}$$

Name: _____

CCSS 2.NBT.5 Fluently add and subtract within 100....

2-Digit Subtraction With Regrouping

$$\begin{array}{r} 52 \\ -37 \\ \hline \end{array}$$

$$\begin{array}{r} 45 \\ -24 \\ \hline \end{array}$$

$$\begin{array}{r} 71 \\ -52 \\ \hline \end{array}$$

$$\begin{array}{r} 74 \\ -30 \\ \hline \end{array}$$

$$\begin{array}{r} 90 \\ -42 \\ \hline \end{array}$$

$$\begin{array}{r} 63 \\ -33 \\ \hline \end{array}$$

$$\begin{array}{r} 80 \\ -9 \\ \hline \end{array}$$

$$\begin{array}{r} 82 \\ -43 \\ \hline \end{array}$$

$$\begin{array}{r} 53 \\ -44 \\ \hline \end{array}$$

$$\begin{array}{r} 73 \\ -26 \\ \hline \end{array}$$

$$\begin{array}{r} 90 \\ -59 \\ \hline \end{array}$$

$$\begin{array}{r} 73 \\ -44 \\ \hline \end{array}$$

$$\begin{array}{r} 63 \\ -33 \\ \hline \end{array}$$

$$\begin{array}{r} 61 \\ -53 \\ \hline \end{array}$$

$$\begin{array}{r} 80 \\ -42 \\ \hline \end{array}$$

$$\begin{array}{r} 42 \\ -26 \\ \hline \end{array}$$

$$\begin{array}{r} 84 \\ -36 \\ \hline \end{array}$$

$$\begin{array}{r} 97 \\ -09 \\ \hline \end{array}$$

$$\begin{array}{r} 55 \\ -22 \\ \hline \end{array}$$

$$\begin{array}{r} 73 \\ -14 \\ \hline \end{array}$$

$$\begin{array}{r} 66 \\ -28 \\ \hline \end{array}$$

$$\begin{array}{r} 72 \\ -34 \\ \hline \end{array}$$

$$\begin{array}{r} 76 \\ -13 \\ \hline \end{array}$$

$$\begin{array}{r} 88 \\ -49 \\ \hline \end{array}$$


$$\begin{array}{r} 81 \\ -68 \\ \hline \end{array}$$

Telling time - whole hours


Grade 2 Time Worksheet

Write the time below each clock.

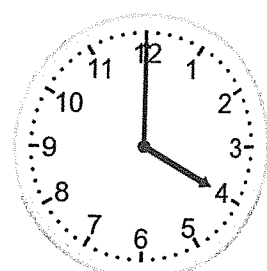
1.




2.




3.




4.




5.




6.



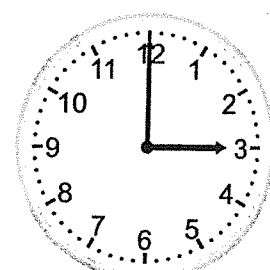
7.



8.



9.

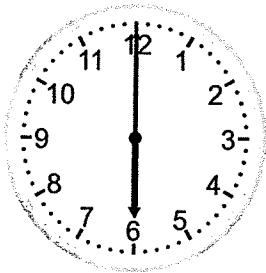


Telling time - whole hours


Grade 2 Time Worksheet

Write the time below each clock.

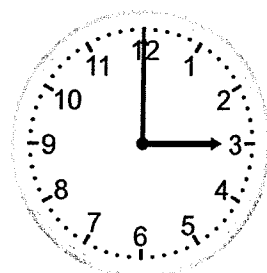
1.



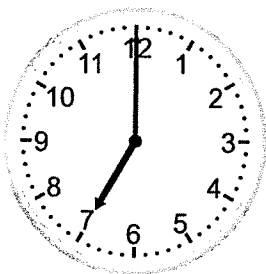
2.




3.




4.




5.




6.




7.



8.



9.

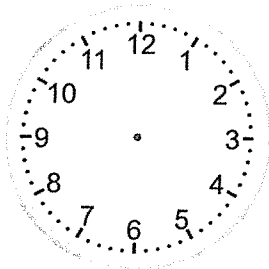


Telling time - whole hours (draw the clock)

Grade 2 Time Worksheet

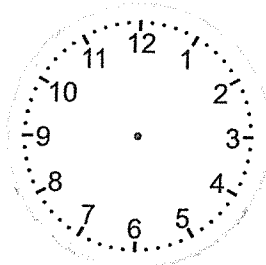
Draw the time shown on each clock.

1.



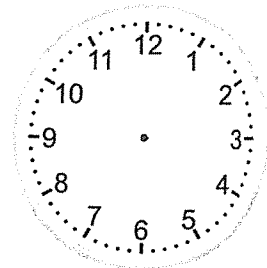
10:00

2.



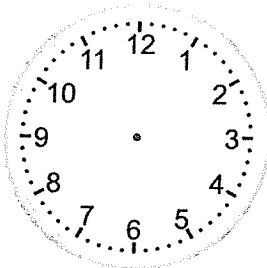
4:00

3.



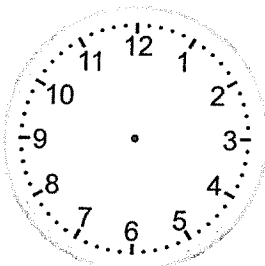
8:00

4.



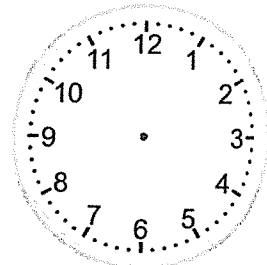
1:00

5.



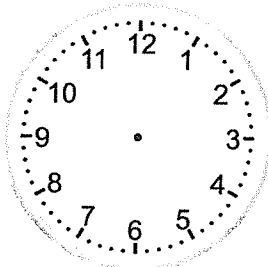
5:00

6.



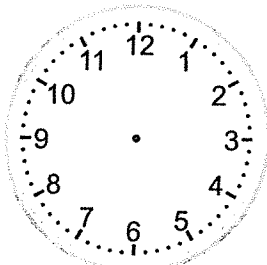
12:00

7.



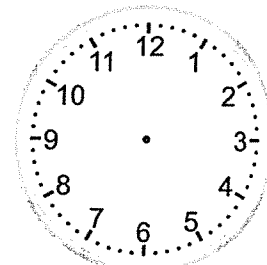
9:00

8.



3:00

9.



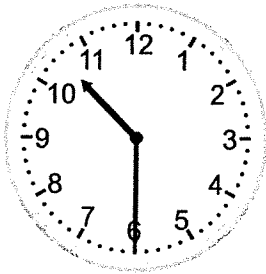
11:00

Telling time - half hours

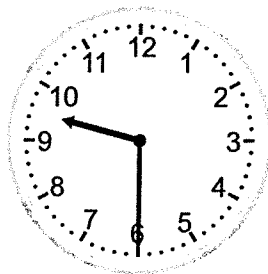
Grade 2 Time Worksheet

Write the time below each clock.


1.




2.



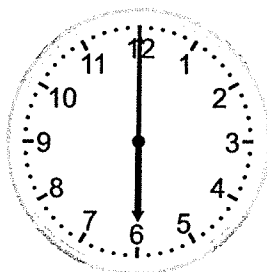
3.




4.




5.




6.




7.



8.



9.




Telling time - quarter hours

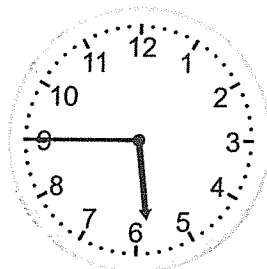
Grade 2 Time Worksheet

Write the time below each clock.


1.




2.




3.



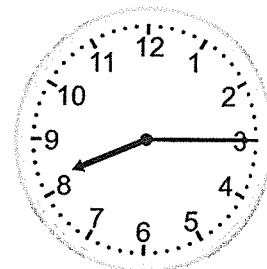
4.




5.




6.



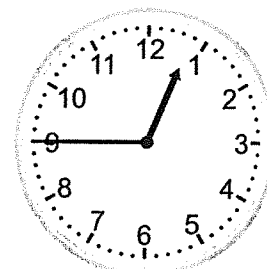
7.



8.



9.




Telling time - 5 minute intervals


Grade 2 Time Worksheet

Write the time below each clock.


1.




2.



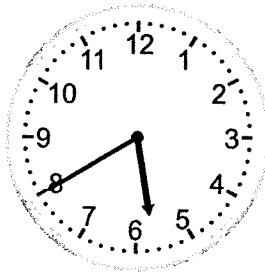
3.




4.




5.



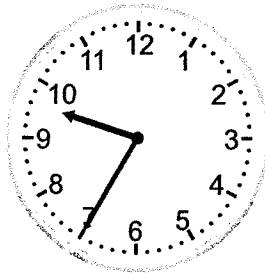
6.



7.



8.



9.

